
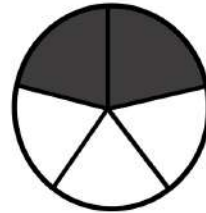


# FRACTION TIME


What is the fraction of the shaded part?



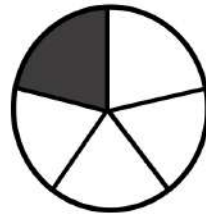
$\frac{1}{4}$




—




—



—



—



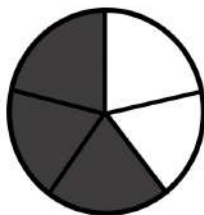
—



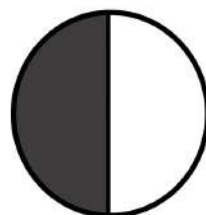
—



—



—



—

**FOLLOW US ON:**